




 = 7+6


 = 8+4


 = 23-5


 = 6+15


 = 24-2


 = 22÷2


 = 26-7


 = 5+18


 = 24-16


 = 10+0


 = 24-0


 = 7-7


 = 17-2


 = 8+17


 = 10x2


 = 17-0


 = 20-6


 = 9+7


 = 13-11


 = 4÷4


 = 11-2

 = 2+4

 = 10-7


 = 25-18

 = 20÷5

 = 18-13

# LES MATHÉMATIQUES DE DENIS

*Aide Denis à trouver la phrase qui parle des céréales.*



0 22 12 0 22 22 2 1

16 22 18 20 0 1 22 14 9 13 25 21 8 0

22 2 1 10 13 9 25 22 22 1 15 9 16

20 25 0 22 1 16 13 25 2 11 20 16 15 22

22 25 2 9 8 1 22 22 25 11 13 16 8 25 22