




 =23+1


 =7x3


 =9-9


 =9x2


 =2+21


 =7+18


 =2x7


 =9+13


 =12x1


 =4x5


 =3x5


 =19-10


 =22-3

 =27-10


 =18-11


 =10+6

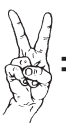
 =25-12


 =24-20


 =9÷9


 =16-5


 =8-6

 =4+1

 =3+7

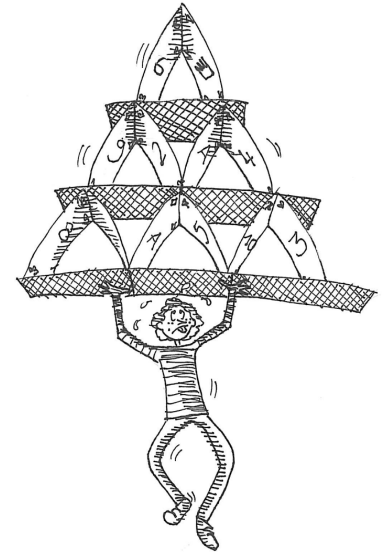
 =8÷1

 =6+0

 =6÷2

LES MATHÉMATIQUES DE DENIS

*Aide Denis à trouver la phrase
qui parle de la maison.*



24 5 23 0 2 17 20 23 2 18 23

0 24 4 11 23 1 7 17 16 23 2 11

0 7 17 1 11 4 2 12 4 23 18 23 1

19 24 12 1 7 17 1 24 11 11 23 17 11 12 7 17

0 23 1 11 25 4 24 14 12 9 23