




 = 5+0


 = 22-14


 = 3+3


 = 5+2


 = 20-11


 = 27-4


 = 5x5


 = 4x0


 = 9+13


 = 5+13


 = 6x4


 = 24-11


 = 7+8


 = 12÷12


 = 14-11


 = 23-12


 = 3x4


 = 3+18


 = 1x19


 = 5+15


 = 8+9

 = 10+4

 = 24-8

 = 8+2

 = 18-14

 = 10-8

LES MATHÉMATIQUES DE MINI ET DENIS



Aide Mini et Denis à trouver la phrase qui parle de la nourriture.

13 5 1 3 17 21 21 22 20 17 21 9

,

9 19 20 13 9 1 19 9 15 8 13 9

7 9 19 5 13 22 15 9 1 20 19 12 17 9

,

13 3 1 15 5 1 25 9