




 =18+4


 =16+3


 =4x4


 =10+3


 =17-8


 =18÷3


 =12-12


 =8+16


 =20+1


 =29-4


 =1x23


 =24-6


 =40÷2


 =5x3


 =19-2


 =3x4


 =7x2


 =20÷2


 =16÷2


 =18-7


 =10-9

 =17-14

 =5+2


 =15-11

 =25÷5

 =18÷9

Les mathématiques de Mini

Aide Mini à trouver la phrase qui parle des moyens de transports.



18 9 8 10 17 1 9 8

12 9 10 20 9 11 11 9 15 11 22 1 4

3 9 18 17 8 13 9 10 17 1 18 9 10

9 18 18 9 8 8 17 15 11

11 17 1 25 17 1 10 8 10 17 15 13 9 8