




 =  $10 \times 0$


 =  $6 \times 4$


 =  $21 - 2$


 =  $9 + 5$


 =  $12 - 4$


 =  $24 - 21$


 =  $13 - 12$


 =  $6 \times 1$


 =  $17 - 7$


 =  $20 - 4$


 =  $8 + 13$


 =  $29 - 4$


 =  $12 + 11$


 =  $2 + 18$


 =  $15 - 0$


 =  $28 - 6$


 =  $4 + 14$


 =  $16 \div 8$


 =  $4 \times 1$


 =  $18 \div 2$


 =  $7 + 5$

 =  $9 - 4$

 =  $26 - 13$


 =  $10 - 3$

 =  $5 + 12$

 =  $25 - 14$

## Les mathématiques de Denis et Mini

*Aide Denis et Mini à trouver la phrase qui parle du zoo.*



25 8

11 15 15

8 4 9

12 20

1 2 0 20 14

16 0 2 14 10 20

15 12

15 20

1 0 2 14 8

14 8 4

0 20 10 23 0 12 7

14 8

22 25 12 4 10 8 12 2 4

22 0 17 4